

Maps

Can you name the 4 main directions?

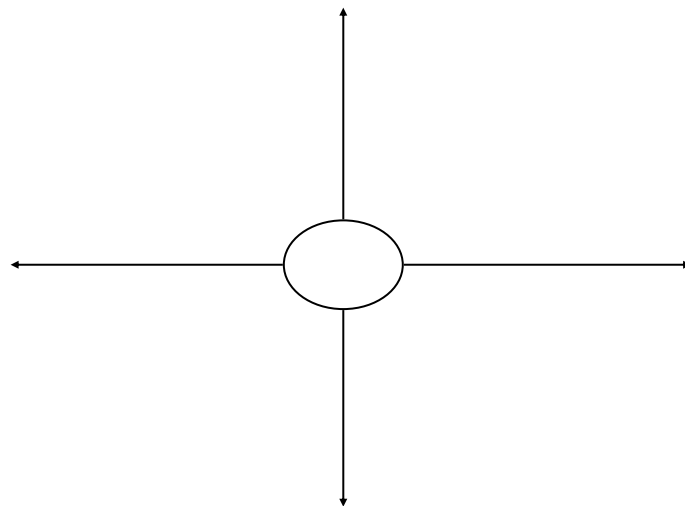
.....


.....

.....

.....





Can you draw them on this diagram?






Maps

Look at the map below:





Maps

What is south of the school?

.....

What is north of the train?

.....

What is west of the supermarket?


.....

What is east of the house?

.....

What is south of the supermarket?

.....



Maps


Give directions from the bottom of the beach, round the house, to the top of the school.

.....

Give directions from one place of your choice to another.

.....

Design your own map and give directions from one place at the south of the map, to another place at the north of the map.



Maps

My map:

My directions from to
